

Introduction to probability

Michelle Arnetta

Summary

Probability theory is an important branch of mathematics, which is foundational to statistics and is used in quantum mechanics. This guide on an introduction to probability covers the ideas of sample space events, independent events, dependent events, and tree diagrams to work out probabilities.

What is probability?

Uncertain situations are everywhere: from rolling a dice and flipping a coin, to weather forecasting and financial markets. How exactly can you approach decision making in the face of uncertainty? For example, should you bring an umbrella tomorrow? Or, should you invest in a certain stock?

When you are facing these situations, you could turn to **probability theory** to predict the likelihood of certain outcomes, especially when you have to make important decisions. Probability theory is not only foundational to the study of statistics, but also has uses in pure mathematics, quantum mechanics, economics, biology, and even in manufacturing.

This guide introduces you to probability theory. First, the concept of sample space will be explained. Next, the complement rule will be demonstrated, and a distinction will be made between theoretical probability and experimental probability. Then you will learn about independent and dependent events.

Sample space

When thinking about probability of something happening, it is important to consider what all the possible **outcomes** are in that situation. The collection of all possible outcomes is known as the **sample space**.

i Definition of sample space

An **outcome** is a single result of an experiment or situation. An **event** is some collection of outcomes. The **sample space** is the set of *all possible outcomes*.

Mathematically speaking, an outcome is an element of the sample space, and an event is a subset of the sample space.

💡 Tip

Mathematically speaking, an outcome is an element of the sample space, and an event is a subset of the sample space.

The sample space can be represented in various different ways, but one common example is to represent them as a **list** of outcomes.

i Example 1

Let's say you wanted to flip a single coin. There are two possible outcomes when you flip a coin: heads (H) or tails (T). Therefore, the sample space of flipping a coin once can be represented as $\{H, T\}$.

i Example 2

There are six possible outcomes when you roll a standard six-sided die: 1, 2, 3, 4, 5, and 6. Therefore, the sample space of rolling a standard six-sided die can be represented as $\{1, 2, 3, 4, 5, 6\}$. Here, an event could be something like 'an even number is rolled', which is represented by the collection $\{2, 4, 6\}$.

But what if the coin was flipped, then the die was rolled? When you are representing the sample space of all possible outcomes of two processes, it would be helpful to use a **table**. When you are representing the sample space of two or more processes, it could also be helpful to use a **tree diagram**.

i Example 3

You flip a coin and roll a die. When you flip a coin, the outcome can either be heads or tails. When you flip a die, the possible outcomes are 1, 2, 3, 4, 5, 6. Combining these together, there are 12 total possible outcomes. When representing this as a list, you could write this as $\{H1, H2, H3, H4, H5, H6, T1, T2, T3, T4, T5, T6\}$.

Since you are working with two events, you could also represent this as a **table**:

	1	2	3	4	5	6
H	H1	H2	H3	H4	H5	H6
T	T1	T2	T3	T4	T5	T6

Alternatively, you could represent it as a **tree diagram**, which is especially useful if you are working with two or more events:

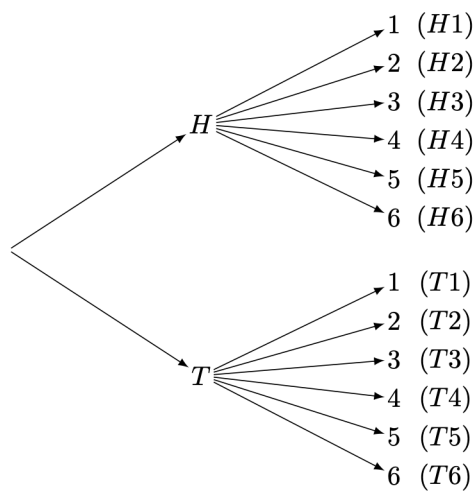


Figure 1: Tree diagram for Example 3, flipping a coin then rolling a die.

Notice that since the coin flipping occurred first, the tree diagram begins with this event. It then branches out to the possible outcomes for when the die is rolled.

Probability and the complement rule

i Definition of probability

Probability refers to the likelihood of an event happening relative to the sample space it is in.

 Tip

To represent the probability of events over the sample space, it would be helpful to use the notation \mathbb{P} .

- The probability of event A occurring can be written as $\mathbb{P}(A)$.
- The probability of event A **not** occurring can be written as $\mathbb{P}(A')$.


You will see this notation used below.

There are three common ways of representing probability:

- As a **fraction**, such as $\frac{1}{2}$, $\frac{1}{5}$, $\frac{3}{4}$
- As a **decimal**, such as 0.5, 0.2, 0.75
- As a **percentage**, such as 50%, 20%, 75%

All three will be used throughout the guide.

Here are two important facts about probability:

 Important

- Probability **always** has to be a number in between 0 and 1. When the probability is 0, there is no possibility of the event happening, and when the probability is 1, the event will definitely happen. Therefore, probability cannot be less than 0, and it cannot be more than 1.

More formally, if A is an event contained in a sample space S , then:

$$0 \leq \mathbb{P}(A) \leq 1.$$

- The probabilities of all outcomes in an event always add up to 1.

This can be expressed more formally as:

$$\sum_{x \in S} P(x) = 1$$

For example, when flipping a coin, the probability of getting heads is $\frac{1}{2}$ (a number between 0 and 1), and the probability of getting tails is $\frac{1}{2}$. You can add these up together to get:

$$\frac{1}{2} + \frac{1}{2} = 1$$

Notice that, in this case, the probability of 'heads' is equal to the probability of 'tails' **not** occurring, and the probability of 'tails' is equal to the probability of 'heads' **not** occurring. Therefore, 'heads' and 'tails' can be called **complementary events**. You could then, for example, subtract the probability of 'heads' from 1 to get the probability of 'tails'.

$$\mathbb{P}(\text{tails}) = 1 - \mathbb{P}(\text{tails}') = 1 - \mathbb{P}(\text{heads}) = 1 - \frac{1}{2} = \frac{1}{2}$$

This is known as the **complement rule**.

Theoretical probability and experimental probability

There are two main types of probability: **theoretical probability** and **experimental probability**.

i Definition of theoretical probability

Theoretical probability is probability based on what you *expect* to happen.

Here is how you can find theoretical probability:

$$\mathbb{P}(\text{event}) = \frac{\text{number of desired outcomes}}{\text{total number of possible outcomes}}$$

i Example 4

Remember from Example 2 that there are six possible outcomes when you roll a standard fair six-sided die; $\{1, 2, 3, 4, 5, 6\}$. It's important to say here that each of the outcomes are equally likely - you have no more probability to roll a six than you do any other number.

So, what is the probability of the event where you roll a 6? Here, there is one desired outcome - a 6. The total number of possible outcomes is 6. Therefore, the probability of rolling a 6 is:

$$\mathbb{P}(\text{roll a 6}) = \frac{1}{6}.$$

So, what is the probability of the event where you roll an odd number? Here, there is three desired outcomes - 1, 3 and 5. The total number of possible outcomes is still 6. Therefore, the probability of rolling an odd number is:

$$\mathbb{P}(\text{roll an odd number}) = \frac{3}{6} = \frac{1}{2}.$$

Finally, what is the probability of not rolling a 6? You could work this out using the complement rule. The probability of not rolling a 6 is the same as 1 minus the probability of rolling a 6. Therefore, the probability of not rolling a 6 is:

$$\mathbb{P}((\text{roll a 6})') = 1 - \mathbb{P}(\text{roll a 6}) = 1 - \frac{1}{6} = \frac{5}{6}.$$

This is the power of the complement rule!

i Definition of experimental probability

Experimental probability is probability based on what actually happens.

Here is how you can find experimental probability:

$$\mathbb{P}(\text{event}) = \frac{\text{number of times that a desired event occurs}}{\text{total number of trials in an experiment}}$$

i Example 5

Suppose you flip a coin 1000 times. The probability of 'tails' may initially be higher or lower than 0.5. However, the more flips you do, the more the probability of 'tails' will tend to 0.5. This is an example of the **law of large numbers**: the more trials you do, the closer your experimental probability will get to the theoretical probability. You can see this visually demonstrated in the graph below:

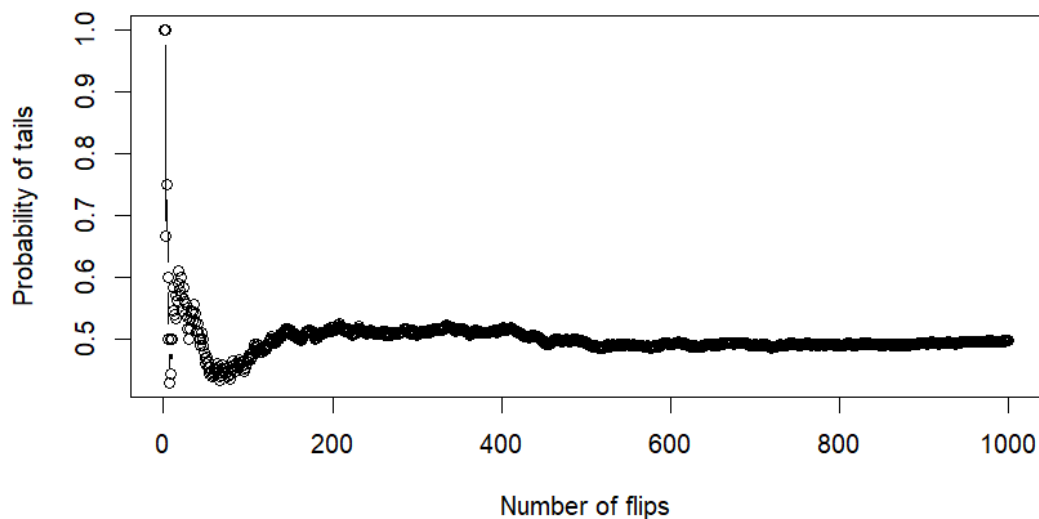


Figure 2: Experimental probability of tails over the course of 1000 coin flips.

Outcomes that vary in probability

The examples you have examined so far involve events with equally probable outcomes. For instance, you have a 50/50 chance of getting either heads or tails after flipping a coin. Similarly, it is equally likely for you to get any number between 1 and 6 after rolling a fair die: a $\frac{1}{6}$ chance. But what if the outcomes vary in probability?

💡 Tip

When all outcomes are equally likely, the sample space is **uniform**. When the outcomes vary in probability, the sample space is **not uniform**.

However, this property is not necessarily reflected in the sample space. For example, even if you flip a biased coin that is more likely to get 'heads', the sample space is still represented as $\{H, T\}$.

The next step in analyzing non-uniform sample spaces is the use of **probability mass functions** or **probability density functions**. See [Guide: PMFs, PDFs, CDFs](#) for more.

It then becomes all the more useful to represent these outcomes with tree diagrams, since outcomes can have different probabilities.

i Example 6

Suppose that you have a bag containing 5 marbles in total, with 2 red marbles and 3 blue marbles. If you draw one marble from the bag, what is the probability of it being a red marble, and what is the probability of it being a blue one? This can be represented as a tree diagram:

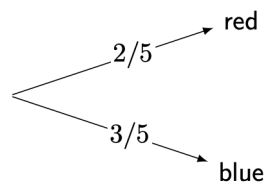


Figure 3: Tree diagram for marble bag in Example 6.

As shown in the diagram, $\mathbb{P}(\text{red})$ is $\frac{2}{5}$, and $\mathbb{P}(\text{blue})$ is $\frac{3}{5}$.

i Example 7

You can also use a tree diagram to represent events with more than two outcomes. Imagine a jar containing 10 candies. It has 1 yellow candy, 4 green candies, and 5 purple candies. If you take one candy from the jar, what is the probability of each colour being taken?

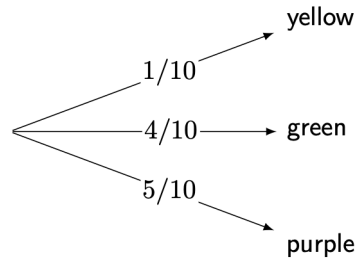


Figure 4: Tree diagram for candy jar in Example 7.

Since $\frac{4}{10} = \frac{2}{5}$ and $\frac{5}{10} = \frac{1}{2}$, the diagram can be simplified as follows:

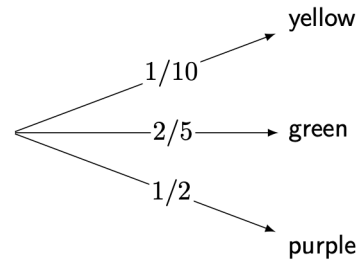


Figure 5: Simplified tree diagram for candy jar in Example 7.

As shown in the diagram, $\mathbb{P}(\text{yellow})$ is $\frac{1}{10}$, $\mathbb{P}(\text{green})$ is $\frac{2}{5}$, and $\mathbb{P}(\text{purple})$ is $\frac{1}{2}$.

i Example 7 (continued)

The **complement rule** also applies to non-uniform sample spaces. Consider the candy jar example. What if you knew the probability of taking a yellow or purple candy, but not the probability of taking a green candy?

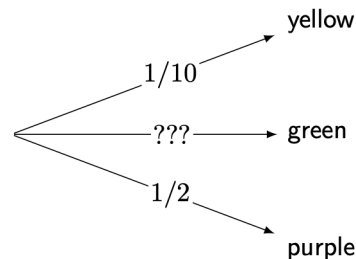


Figure 6: Incomplete tree diagram for candy jar in Example 7.

To apply the complement rule, you should first find the probability of **not** taking the green candy. You can do this by adding together the probabilities of taking a yellow or purple candy.

$$\mathbb{P}((\text{green})') = \mathbb{P}(\text{yellow}) + \mathbb{P}(\text{purple}) = \frac{1}{10} + \frac{1}{2} = \frac{1}{10} + \frac{5}{10} = \frac{6}{10}$$

The probability of taking the green candy is **complementary** to the probability of not taking the green candy. From this, you can calculate the mystery probability:

$$\mathbb{P}(\text{green}) = 1 - \mathbb{P}((\text{green})') = 1 - \frac{6}{10} = \frac{4}{10} = \frac{2}{5}$$

Independent events

When you are representing the probabilities of two or more events, it can be important to consider the relationships between the events. Events can either be **dependent** on or **independent** of each other.

i Definition of independent events

Two events A, B are **independent** if the occurrence of one event does not affect the likelihood of the other event happening.

If two events A and B are independent, then the probability of both events occurring is:

$$\mathbb{P}(A \cap B) = \mathbb{P}(A) \cdot \mathbb{P}(B)$$

The symbol \cap is the 'intersection' of A and B - here, $\mathbb{P}(A \cap B)$ means $\mathbb{P}(A \text{ and } B)$.

i Example 8

To illustrate this, you can return to the marble bag example in Example 6. What if two instances of drawing a marble occurred, with the following events:

- Event 1: One marble is drawn, and the colour of the marble is recorded.
- Event 2: After the marble from Event 1 is put back into the bag, another marble is drawn, and the colour of the marble is recorded.

These events can be outlined by a tree diagram:

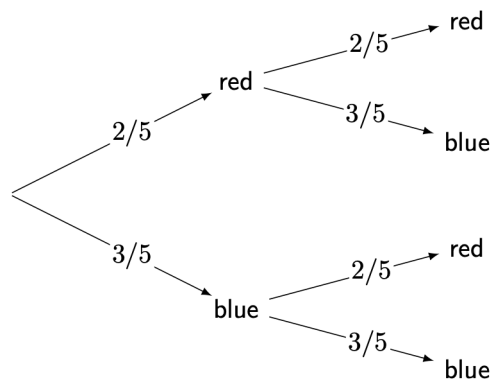


Figure 7: Tree diagram for two dips in the marble bag in Example 8.

No matter what the colour of the marble from part 1 is, the probabilities of each marble colour will remain the same for part 2. This is because the first marble was drawn and replaced by the same colour. Considering this, you can conclude that 1 and 2 are **independent events**, as the outcome of part 1 does not influence the outcome of part 2.

i Example 8 (continued)

You can also use the tree diagram as a guide to calculating the probabilities of two particular events occurring:

- Probability of drawing a red marble, then a red marble:

$$\mathbb{P}(\text{red and red}) = \left(\frac{2}{5}\right) \left(\frac{2}{5}\right) = \frac{4}{25}$$

which is 0.16 or 16%.

- Probability of drawing a red marble, then a blue marble:

$$\mathbb{P}(\text{red and blue}) = \left(\frac{2}{5}\right) \left(\frac{3}{5}\right) = \frac{6}{25}$$

which is 0.24 or 24%.

- Probability of drawing a blue marble, then a red marble:

$$\mathbb{P}(\text{blue and red}) = \left(\frac{3}{5}\right) \left(\frac{2}{5}\right) = \frac{6}{25}$$

which is 0.24 or 24%.

- Probability of drawing a blue marble, then a blue marble:

$$\mathbb{P}(\text{blue and blue}) = \left(\frac{3}{5}\right) \left(\frac{3}{5}\right) = \frac{9}{25}$$

which is 0.36 or 36%.

As you would expect, all probabilities add up to 1!

Dependent events

i Definition of dependent events

Two events are **dependent** when the occurrence of one event affects the likelihood of another event happening.

Dependent events tend to occur when an event changes the sample space by removal of an outcome.

i Example 9

The previous marble bag example in Example 6 can be adjusted to demonstrate **dependent events**. What if the two events occurred in this way instead?

- Event 1: One marble is drawn, and the colour of the marble is recorded.
- Event 2: The marble from Event 1 is not replaced. Another marble is drawn, and the colour of the marble is recorded.

Here, in the first event, the sample space can be written as {red, red, blue, blue, blue}. In the second event, the sample space has changed, because the ball is not replaced. For instance, if a red ball is picked, then the sample space changes in the second event to {red, blue, blue, blue}. This is how the events would look on a tree diagram:

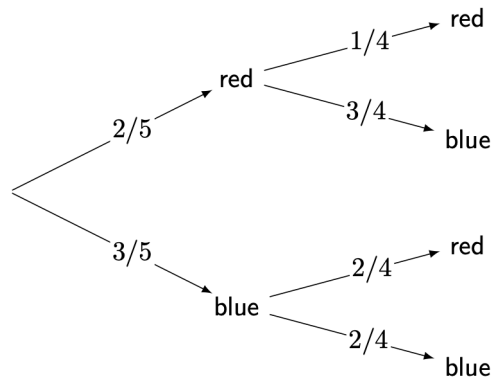


Figure 8: Tree diagram for two dips in the marble bag in Example 9.

You can observe that in the second event the **denominators** of the probabilities change from 5 to 4. This is because there were initially 5 marbles in the bag, and one marble was drawn without replacement, leaving 4 marbles in the bag for Event 2. This is because the sample space has changed.

i Example 9 (continued)

The **numerators** only change for the marble colour already drawn. If a red marble is drawn, then 1 red marble will be left among the 4 remaining marbles in the bag, so the probability of drawing a red marble in Event 2 is $\frac{1}{4}$. On the other hand, if a blue marble is drawn, then 2 blue marbles will be left among the 4 remaining marbles in the bag, so the probability of drawing a blue marble in event 2 is $\frac{2}{4}$.

Therefore, the probabilities of outcomes in event 2 are **dependent** on the outcome of event 1.

As with independent events, you can use the tree diagram as a guide to calculating the probabilities of two particular events occurring:

- Probability of drawing a red marble, then a red marble:

$$\mathbb{P}(\text{red then red}) = \left(\frac{2}{5}\right) \left(\frac{1}{4}\right) = \frac{2}{20} = \frac{1}{10}$$

which is 0.1 or 10%.

- Probability of drawing a red marble, then a blue marble:

$$\mathbb{P}(\text{red then blue}) = \left(\frac{2}{5}\right) \left(\frac{3}{4}\right) = \frac{6}{20} = \frac{3}{10}$$

which is 0.3 or 30%.

- Probability of drawing a blue marble, then a red marble:

$$\mathbb{P}(\text{blue then red}) = \left(\frac{3}{5}\right) \left(\frac{2}{4}\right) = \frac{6}{20} = \frac{3}{10}$$

which is 0.3 or 30%.

- Probability of drawing a blue marble, then a blue marble:

$$\mathbb{P}(\text{blue then blue}) = \left(\frac{3}{5}\right) \left(\frac{2}{4}\right) = \frac{6}{20} = \frac{3}{10}$$

which is 0.3 or 30%.

As you would expect, all probabilities add up to 1!

Tip

The study of probabilities given that an event has already happened is known as **conditional probability**. For more about conditional probability, see [Guide: Conditional probability](#).

Quick check problems

1. Today, it can either rain or not rain. Suppose that the probability of it raining is 0.7. What is the probability of it not raining?
2. You roll a six-sided die three times. What is the probability of getting a 6 three times?
3. A researcher flips a coin 10 times, and it lands on heads 7 times. Therefore, the researcher concludes that $\mathbb{P}(\text{heads})$ is $\frac{7}{10}$. What type of probability is this?
4. You are given three statements below. Decide whether they are true or false.
 - (a) The sum of the probabilities of complementary events is 1.
 - (b) Only tables can be used to represent the sample space of two events.
 - (c) Tree diagrams can be used to represent both dependent and independent events.

Further reading

For more questions on the subject, please go to [Questions: Introduction to probability](#).

For more about how to represent probabilities as functions on the sample space via probability mass functions and probability density functions, please go to [Guide: PMFs, PDFs, CDFs](#).

For more about how to work out probabilities after certain events have already occurred, please go to [Guide: Conditional probability](#).

Version history

v1.0: initial version created 04/25 by Michelle Arnetta as part of a University of St Andrews VIP project.

This work is licensed under [CC BY-NC-SA 4.0](#).